
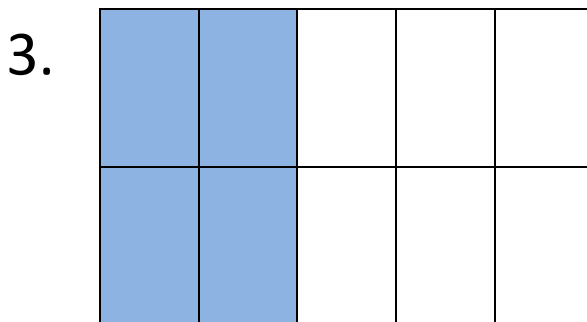
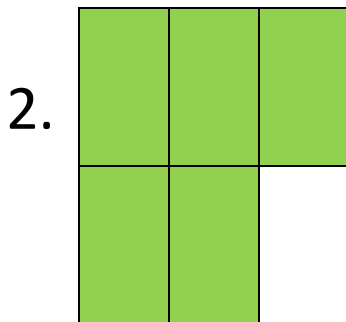





Guaranteach
a better way to learn

Practice Writing Fractions

Please write a fraction that is equivalent to the shaded portion in each of the images shown below, then write one for the un-shaded portion.



Please write each of the following fractions in words.

5. $\frac{1}{3}$

6. $\frac{5}{6}$

7. $\frac{2}{4}$

8. $\frac{7}{11}$

Please draw a picture that represents each of the following fractions.

9. $\frac{1}{2}$

10. $\frac{2}{3}$

11. $\frac{3}{6}$

12. $\frac{5}{8}$